

1) Quelle est la nature de ces quadrilatères ?

losange, rectangle, carré, parallélogramme, trapèze, quelconque ?

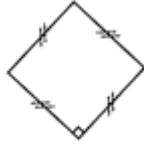
Le même signe sur plusieurs côtés indique qu'ils ont la même longueur

Inscrire sous chaque quadrilatère sa nature

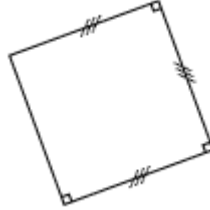
A



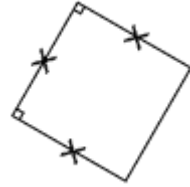
B



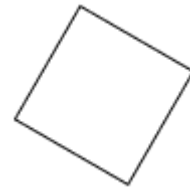
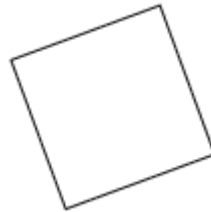
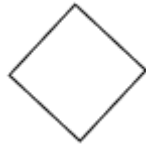
C



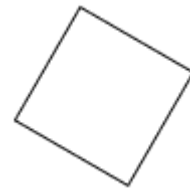
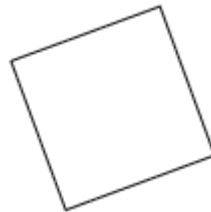
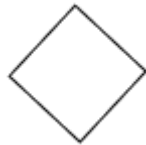
D



2) Colorier un côté en rouge et le périmètre en vert.



3) Colorier les surfaces intérieures



4) Compléter ce tableau :

	<b>A</b>	<b>B</b>	<b>C</b>	<b>D</b>
<b>Côté</b>	1 cm			
<b>Périmètre</b>		8 cm		
<b>Aire</b>			9 cm <sup>2</sup>	5 cm <sup>2</sup>